

Monday
7th July



Monday 7th July

TBAT: improve and refine my handwriting.

Pair

Pear

Hare

Hair

Whether

Weather

Can you think of any more contractions?

A vertical sheet of white paper with ten sets of horizontal lines for handwriting practice. Each set consists of three lines: a solid blue top line, a dashed grey middle line, and a solid blue bottom line. The sets are arranged vertically, providing a guide for letter height and placement.

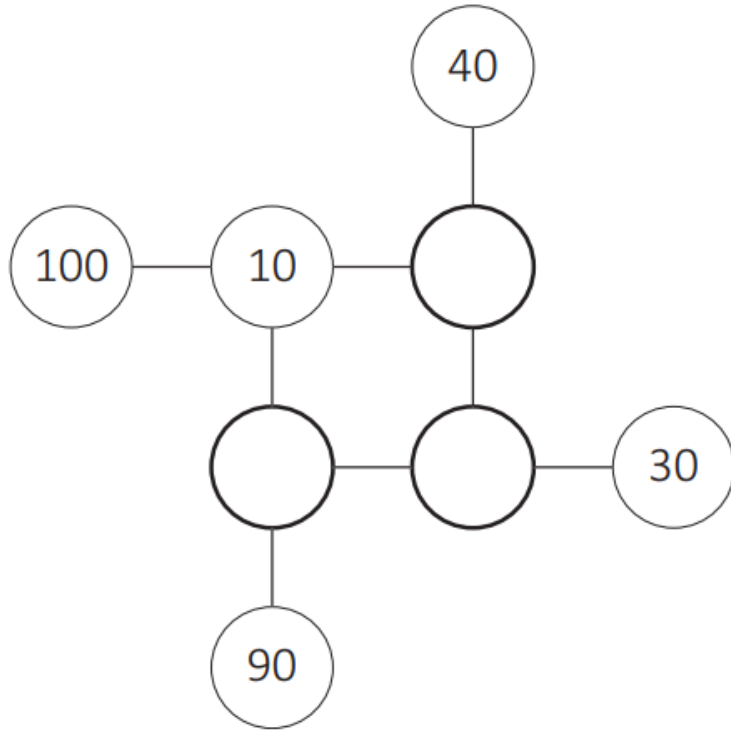
TBAT: address misconceptions.

TBAT: address misconceptions.

07.07.25

TBAT: address misconceptions.

Complete this puzzle so that each line adds up to 120.



Circle two fractions that are equivalent to 0.6

$$\frac{1}{4}$$

$$\frac{60}{100}$$

$$\frac{1}{60}$$

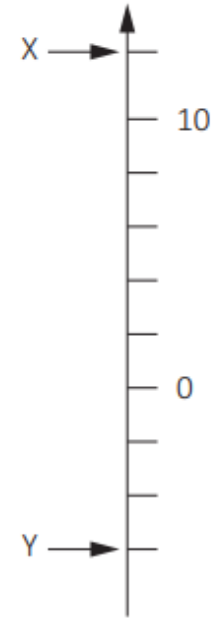
$$\frac{6}{10}$$

$$\frac{6}{600}$$

07.07.25

TBAT: address misconceptions.

Here is part of a number line.



a) What is the value of X?

X =

b) What is the value of Y?

Y =

07.07.25

TBAT: address misconceptions.

Eva is thinking of a number between 50 and 60.

Tick the only Roman numeral that could represent this number.

XX

☐

VI

☐

LII

☐

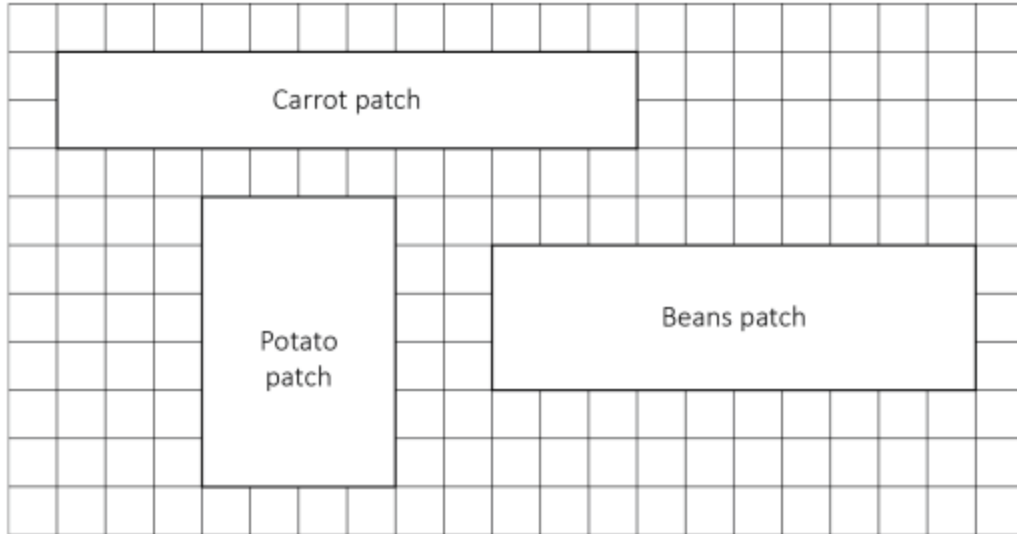
C


☐

07.07.25

TBAT: address misconceptions.

Farmer Ant has 3 vegetable patches.



 = 1m^2

a) Find the area of the carrot patch.

m^2

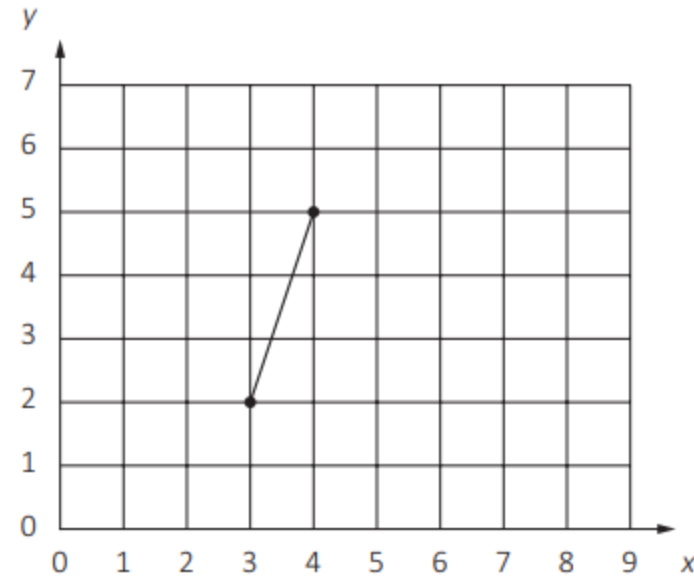
b) Find the difference between the area of the potato patch and the area of the beans patch.

m^2

07.07.25

TBAT: address misconceptions.

Here is one side of a quadrilateral drawn on a coordinate grid.



The quadrilateral has four vertices.

a) Plot the two missing vertices at (7,5) and (8,2) on the grid.

b) Use a ruler to join the vertices.

Name the quadrilateral.

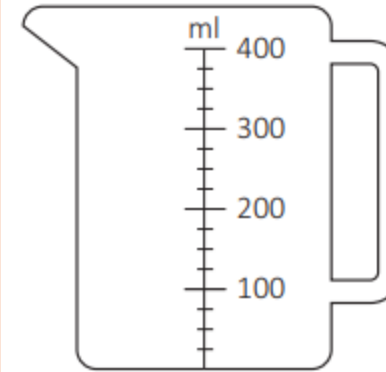
07.07.25

TBAT: address misconceptions.

Katie is making a fruit juice punch.

She pours 125ml of apple juice into a jug.

a) Draw a line on the jug to show the level of apple juice.



b) She then pours in some orange juice.

How much orange juice is needed to fill the jug to 375ml?

ml

07.07.25

TBAT: address misconceptions.

The world record for the Under 20s female marathon is 2 hours and 20 minutes.

The record for the men's is 16 minutes faster.



What is the record for the men's? Give your answer in minutes.



Show
your
working.

									minutes					

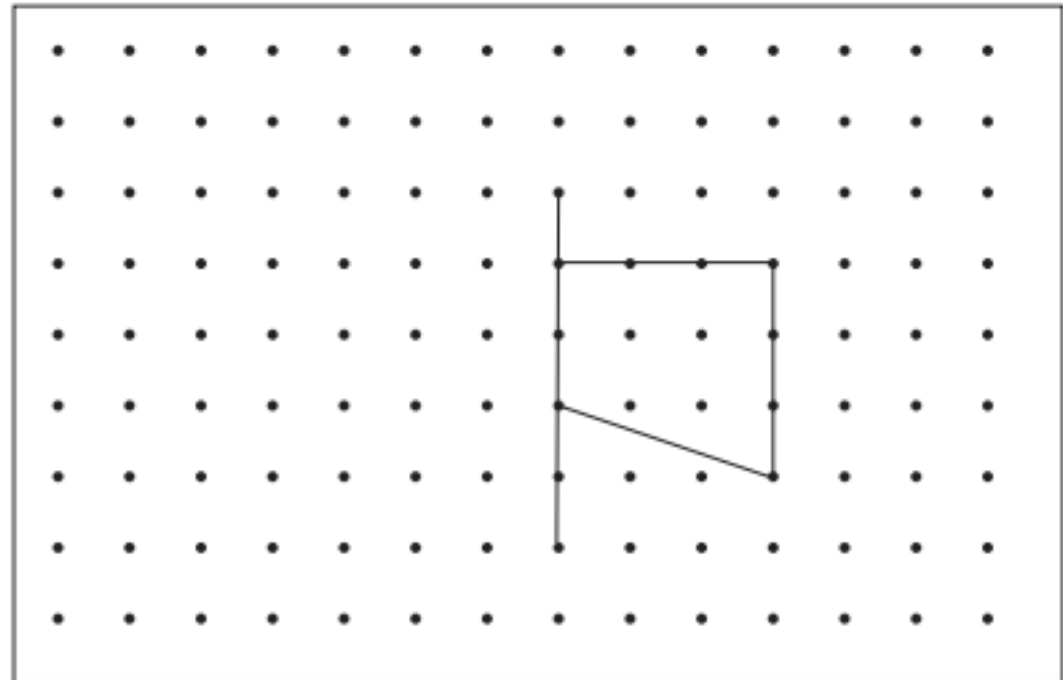
2 marks

07.07.25

TBAT: address misconceptions.

Complete the shape by reflecting it in the mirror line.

Use a ruler.



07.07.25

TBAT: address misconceptions.

Eva picks 20 strawberries.



a) She gives $\frac{2}{5}$ of her strawberries to Shiv.

How many strawberries does she give to Shiv?

1 mark

b) Eva then gives $\frac{1}{6}$ of her remaining strawberries to Dev.

How many strawberries does Eva have now?



Show
your
working.

2 marks

Monday 7th July

TBAT: address misconceptions.

Which sentence contains two **nouns**?

Tick **one**

The dog was small and white.

☐

He walked quickly and happily.

☐

There was a rabbit and a hamster.

☐

They can sing and dance.

☐

Circle all of the words that should start with a **capital letter** in the sentences below.

matthew browning went on holiday. he stayed
in london for five days.

Monday 7th July

TBAT: address misconceptions.

Circle both **determiners** in the sentence below.

The tiny bird was pecking at an apple core.

Circle both the **adverbs** in the sentence below.

We finally arrived at the museum in London but it had closed earlier.

Write a **possessive pronoun** to replace the underlined words.

Mrs Begum pushed Mrs Begum's pram down the road.

Monday 7th July

TBAT: address misconceptions.

Tick the sentence below that uses **inverted commas** correctly.

Tick **one**

Mum whispered, "It's nearly time to go."

☐

Mum whispered, "It's nearly time to go".

☐

Mum whispered "It's nearly time to go."

☐

"Mum whispered," It's nearly time to go.

☐

Rewrite the sentence below using **capital letters** and **full stops** correctly.

we play football every thursday night

Monday 7th July

TBAT: address misconceptions.

Insert **two** commas in the sentence below so that it is punctuated correctly.

The old black cat lived with Mrs Green her son and her daughter.

Complete each sentence below with a word formed from the root word hope.

She was _____ that she would be selected.

We will _____ be home on time.

Tick the sentence that uses the **apostrophe** correctly.

Tick **one**

All of the bushes' leaves had turned brown.

☐

All of the bush'es leaves had turned brown.

☐

All of the bushes leave's had turned brown.

☐

All of the bushes' leaves' had turned brown.

☐



Please remember to bring out:

- water bottle
- a hat